

परमाणु ऊर्जा शिक्षण संस्था

Atomic Energy Education Society

कार्यपत्रक / Worksheet (2025-26)

कक्षा/Class : IV अनुभाग / Sec : _____

अंक / Marks : 80

विषय / Subject : हमारे आस-पास की दुनिया / The World Around Us

माह / Month : सितम्बर / September

दिया गया पाठ्यक्रम / Portion covered – Chapter 1 to 5 (Term 1)

विद्यार्थी का नाम / Name of the student : _____

अनुक्रमांक / Roll No: _____

OBSERVATION AND REPORTING (25 MARKS)

Q1. Observe the picture and answer the questions.

(5 x 2 =10)



1) Where do we drop our letters to be sent? Who delivers letters to our home?



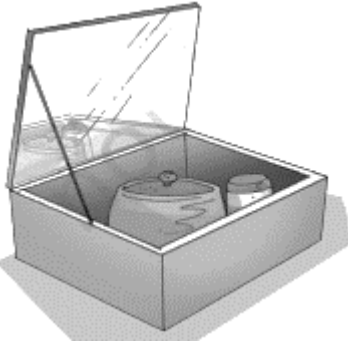
2) Identify this bird and write its name. What does this bird have to catch its prey?



3) What kind of food group is this? Name any two food items from this group.



4) Name the person who mends wall using bricks and cement called? Write the name of any one tool which is used for building walls.



5) Identify the device and write its name. Write any one benefit of using this device.

Q2. Name the following .

(4x1=4)

1. People in Sikkim, who are specialist in agriculture – _____
2. A hut built using bamboo and hay during Magh Bihu – _____
3. A word in French which means a director or head of the kitchen – _____
4. An animal which can live on water as well as land – _____




Q3. Give two examples of each-

(3 x 1 = 3)

1. Public places - _____
2. Harvest festivals - _____
3. Indian tribes - _____

Q4. Identify the method of cooking and write its name.

(3 x 1 = 3)



.....

.....

.....

Q5. Answer the questions based on the picture given.

(1 X 5 = 5)



a) What is the value of the note?

b) How many languages are there on the note?

c) Which bank issues this note?

d) Which famous Indian prominent leader's image is printed on the note?

e) Encircle the national emblem of our country on the above note.

IDENTIFICATION AND CLASSIFICATION (30 MARKS)

Q6. Who am I?

(2 x 1 = 2)

(a) I am an insect, green in colour. I have three pairs of legs, one pair of antennae to sense surroundings, also sometimes have two pairs of wings. Ans: _____

(b) I am a small grain, round and grey. In winter roti, I make my way. Good for health and full of might, eat me to feel strong and bright. Ans: _____

Q7. Match the column.

(4 x 1 = 4)

Column A

Column B

- 1) Vat Purnima
- 2) Jenu
- 3) Tumri
- 4) Fish

- a) Honey
- b) Banyan Tree
- c) Fins
- d) Uttarakhand

Q8. Circle the one which does not belong to the group.

(4 x 1 = 4)

- | | | | |
|-------------|------------|-----------|---------|
| 1. Ant | Wasp | Butterfly | Termite |
| 2. School | Playground | Hospital | Kitchen |
| 3. Marigold | Tulsi | Amla | Ajwain |
| 4. Chips | Idli | Burger | Pizza |

Q9. Answer the following questions.

(5×3=15)

1. What is Van Mahotsav? When is it celebrated?

2. Who is a nature scientist? Write about its role.

3. What is a balanced diet?

4. Write the full form of ATM. Write any two uses of ATM.

5. What is Gond art? How are the paints made to make Gond art?

Q10. Compare between communication in **earlier times** and communication in **present time** on the following points. (1x5=5)

Category	Communication in earlier times	Communication in present time
Type of communication		
Speed of communication		
Frequency of communication		
Language of communication		
Challenges faced		

DISCOVERY OF FACTS (25 MARKS)

Q11: Name the following.

(5 x 1 = 5)

1. State animal of Tripura - _____
2. A big, red-coloured squirrel found in Pachmarhi and some other places - _____
3. A tree known as flame of forest - _____
4. A traditional food of Telangana with six different taste - _____.
5. Small patches of forest, protected by local community - _____

Q12. Answer the following questions.

(2 x 2 = 4)

1. What is super food? Write the names of any two super food.

2. What things should be kept in a first-aid box?

Q13. Give reason.

(3 x 2 = 6)

1. Different plants and animals are dependent on each other.

2. We should avoid eating junk food.

3. Drinking sufficient water should be a part of our healthy habits.

Q14. Circle ten words related to food in the grid below.

One example is given below.

($10 \times \frac{1}{2} = 5$)

K	O	B	L	C	I	S	A	B
H	E	A	E	B	T	E	P	E
O	T	J	M	E	N	G	O	A
N	U	R	O	J	L	G	T	N
E	P	A	N	R	H	O	A	S
Y	M	A	N	G	O	A	T	R
S	A	O	C	A	R	R	O	T
N	T	A	M	L	A	L	F	E
L	G	T	J	A	U	A	U	W

Q15. Locate the state in the given map.

(1x5=5)

1. Madhya Pradesh
2. Karnataka
3. Uttarakhand
4. Andhra Pradesh
5. Tripura

